



BOTSWANA EXAMINATIONS COUNCIL
JUNIOR CERTIFICATE EXAMINATION

SOCIAL STUDIES

15/2

Paper 2

October/November 2022

Marks: 80

Time: 2 Hours 15 Minutes

**Candidate
Full Names:**

Centre Number:

J	C				
---	---	--	--	--	--

Candidate Number:

--	--	--	--

INSTRUCTIONS

1. Write your full names and examination number in the spaces provided above.
2. Answer **ALL** questions in all sections.
3. All answers must be written in the spaces provided.
4. Candidates are allowed to use a calculator and mathematics set in this paper.

FOR EXAMINER'S USE ONLY

Question	Marks Scored
1	
2	
3	
4	
5	
6	
7	
Total Marks	

This question paper contains 11 printed pages.

562

0051

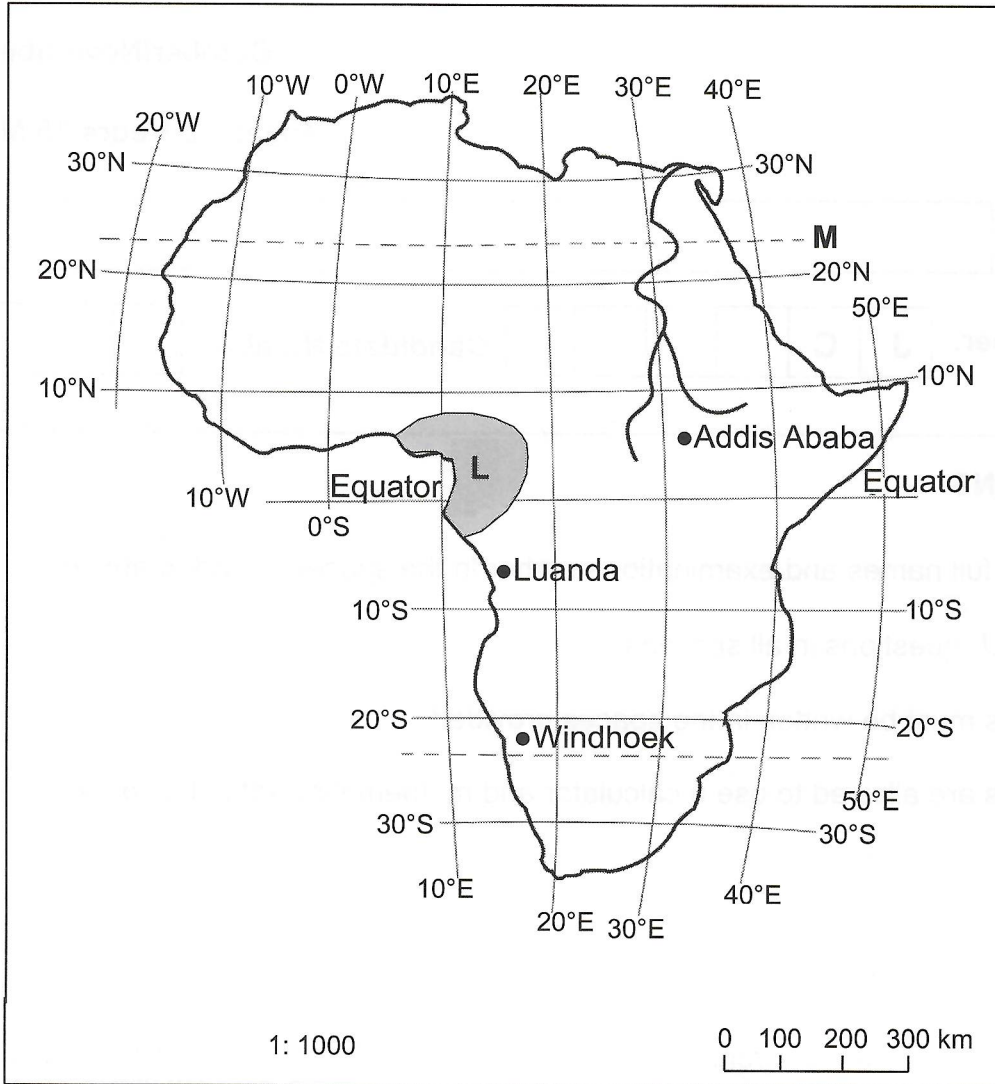


Section A

(30 marks)

Answer **all** questions in this section.

Study the map of Africa below and answer question 1.



1. (a) Identify the following features:

(i) Environmental region marked L.

..... (1)

(ii) Latitude line marked M.

..... (1)

(iii) The direction of Windhoek from Addis Ababa.

..... (1)

(b) What is the location of Luanda using lines of Latitudes and Longitudes?

Latitudes

..... (1)

Longitudes

..... (1)

(c) Identify **one** type of scale used on the map.

..... (1)

(d) Describe **two** human activities practised in the environmental region marked L.

.....
.....
.....
.....
..... (4)

[Total: 10]

Read the information below and answer question 2.

The estimated total area damaged by veld fires for the years 2006, 2008 and 2010 in different land management areas is 13,6 million hectares.

2. (a) (i) State **two** environmental problems that might have resulted from the burning of the areas.

.....
.....
..... (2)

(ii) Suggest **two** ways of addressing the problem of veld fires.

.....
.....
..... (2)

(b) Describe **three** consequences of a polluted environment.

.....

.....

.....

.....

.....

.....

.....

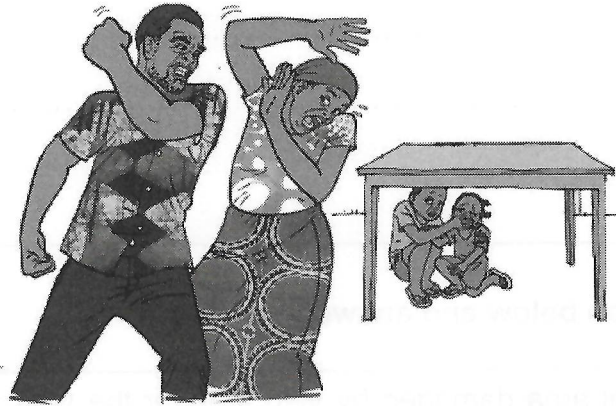
.....

.....

(6)

[Total: 10]

Use the image showing violence below to answer questions 3 (a) and (b).



3. (a) Describe the form of violence shown.

.....

.....

(2)

(b) Describe **two** ways in which the form of violence shown can be addressed.

.....

.....

.....

.....

(4)



(c) Explain **two** ways in which customary marriage affects the rights of married women in Botswana.

.....

.....

.....

.....

.....

(4)

[Total: 10]

Section B

(30 Marks)

Answer **all** questions in this section.

4. (a) Explain **two** ways in which the *Dikgosi* reacted to the plan to transfer Bechuanaland to the British South Africa Company.

.....
.....
.....
.....
.....
..... (4)

- (b) Explain any **three** effects of the scramble for Africa on Africans.

.....
.....
.....
.....
.....
.....
..... (6)

[Total: 10]

5. (a) Explain **two** efforts made by the government of Botswana to promote economic diversification.

.....
.....
.....
.....
..... (4)

(b) Discuss **two** challenges posed by HIV/AIDS on the economy of Botswana.

.....
.....
.....
.....
.....
.....
..... (6)

[Total: 10]

6. (a) Describe **two** ways in which the Legislative branch of government checks on the Executive branch.

.....
.....
.....
..... (4)

(b) Discuss **two** negative effects of rural-urban migration on rural areas.

.....

.....

.....

.....

.....

.....

.....

.....

.....

.....

(6)

[Total: 10]

Section C

(20 marks)

For
Examiner's
Use

Answer **all** questions in this section.

Use the information below to answer question 7.

Kgotla carried out a study on cattle in Mokala cattle post in 2011. The findings of the study were recorded as follows:

Cattle breeds	Freehold land in hectors	Number of cattle from freehold sold to BMC	Communal land in hectors	Number of cattle from communal land sold to BMC
Brahman	300	130	650	600
Bonsmara	30	15	350	310
Tuli	100	50	180	150
Tswana	500	280	350	300
Total	930	475	1530	1360

7. (a) Suggest a title for Kgotla's study.

..... (1)

(b) (i) State **two** methods of data collection that Kgotla might have used.

.....
..... (2)

(ii) Give **two** advantages of any of the methods of data collection stated in 7 (b) (i).

.....
.....
..... (2)

(c) State **three** possible aims of the study.

.....
.....
.....
..... (3)

(d) State **three** possible conclusions of the study.

.....
.....
.....
.....
.....
..... (3)

(e) State **two** possible problems that Kgotla might have encountered when carrying out the study.

.....
.....
.....
..... (2)

(f) State **one** purpose of the study.

..... (1)


- (g) Present the data for cattle breeds kept in freehold land in the form of a histogram.

A large grid for drawing a histogram, consisting of 20 columns and 20 rows.

(6)

[Total: 20]

(g) Present the data for cattle breeds kept in farms and in farms in a histogram



562

0051



[Form 30]