



BOTSWANA EXAMINATIONS COUNCIL
JUNIOR CERTIFICATE EXAMINATION

SOCIAL STUDIES

15/2

Paper 2

October/November 2021

Marks: 80

Time: 2 Hours 15 Minutes

**Candidate
Full Names:**

Centre Number:

J	C				
---	---	--	--	--	--

Candidate Number:

--	--	--	--

INSTRUCTIONS

1. Write your full names and examination number in the spaces provided above.
2. Answer **ALL** questions in all sections.
3. All answers must be written in the spaces provided.
4. Candidates are allowed to use a calculator and mathematics set in this paper.

FOR EXAMINER'S USE ONLY

Question	Marks Scored
1	
2	
3	
4	
5	
6	
7	
Total Marks	

This question paper contains 13 printed pages.

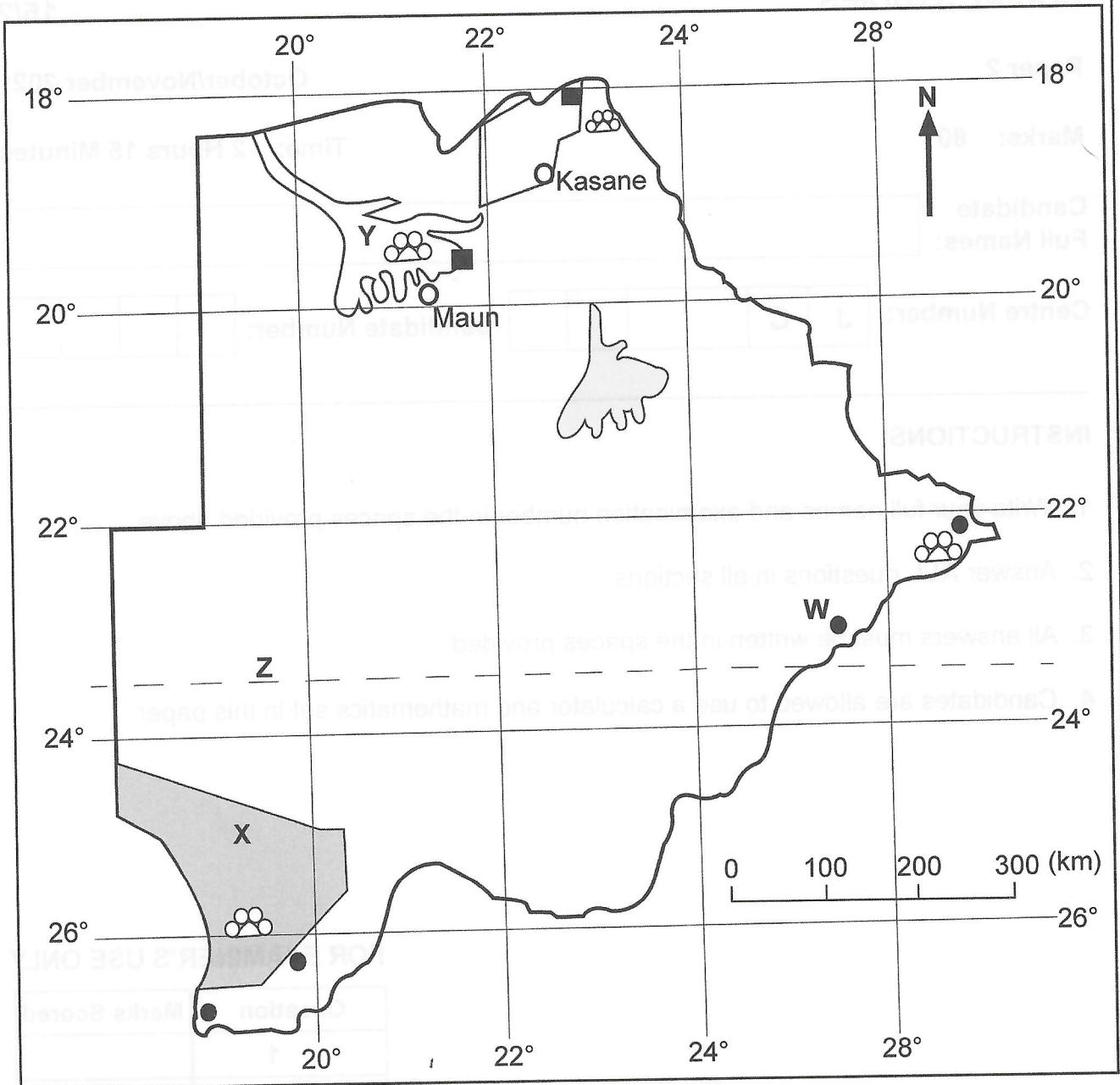


Section A

(30 Marks)

Answer **all** questions in this section.

Study the map below and use it to answer question 1.



KEY: ■ National Parks and Game Reserves

○ Towns

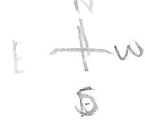
● Village

⊙ Major wildlife

193

A025





1. (a) Identify the following features on the map.
- (i) Delta marked Y..... (1)
 - (ii) The environmental zone marked X (1)
 - (iii) The direction of point W from feature Y (1)
- (b) What is the straight line distance between point W and Y?
..... (1)
- (c) Identify **two** tourist attractions shown on the map other than delta Y.
.....
..... (2)
- (d) Explain **two** ways by which the delta marked Y could be mismanaged by people.
.....
.....
.....
..... (4)

[Total: 10]

Read the passage below and answer questions 2 (a) and (b).

Ms Botshelo has for a long time been ploughing five hectares of land and getting 110 bags of beans. In the last 2 years, Ms Botshelo's production reduced to 50 bags on the same piece of land.

2. (a) State **two** problems that might have contributed to the decline in production.
.....
..... (2)



(b) Given Ms Botshelo's challenges, explain **two** ways in which the government could assist her.

.....

.....

.....

.....

..... (4)

(c) Explain **two** agricultural practices that can negatively impact on the environment.

.....

.....

.....

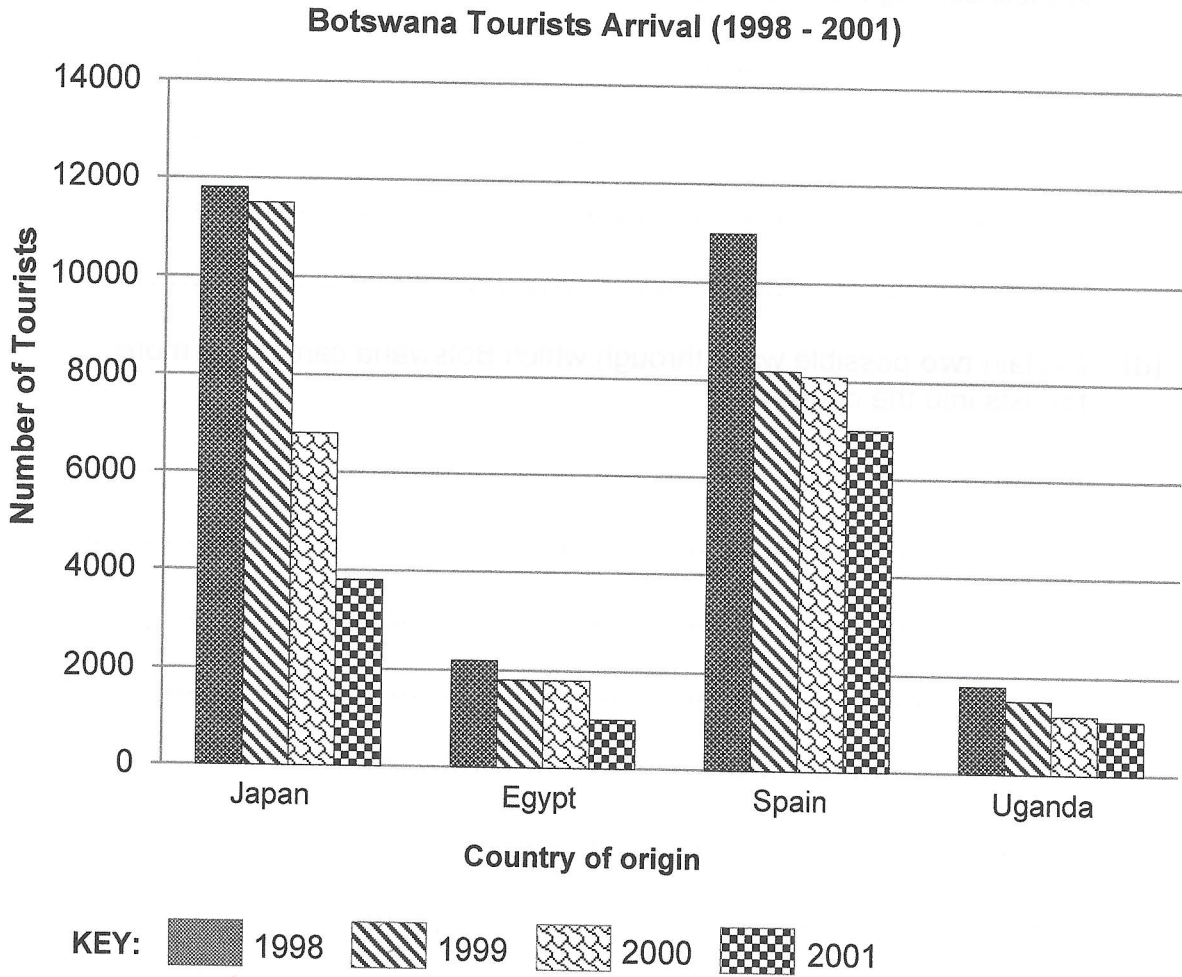
.....

.....

..... (4)

[Total: 10]

Use the graph below to answer questions 3 (a) and (b).



3. (a) Describe the trend of tourists arrival from Spain between 1998 – 2001.

.....
..... (1)

(b) Suggest **two** reasons that might have led to the general trend reflected in tourists visit to Botswana between 1998 and 2001.

.....
.....
..... (2)

Section C

(20 Marks)

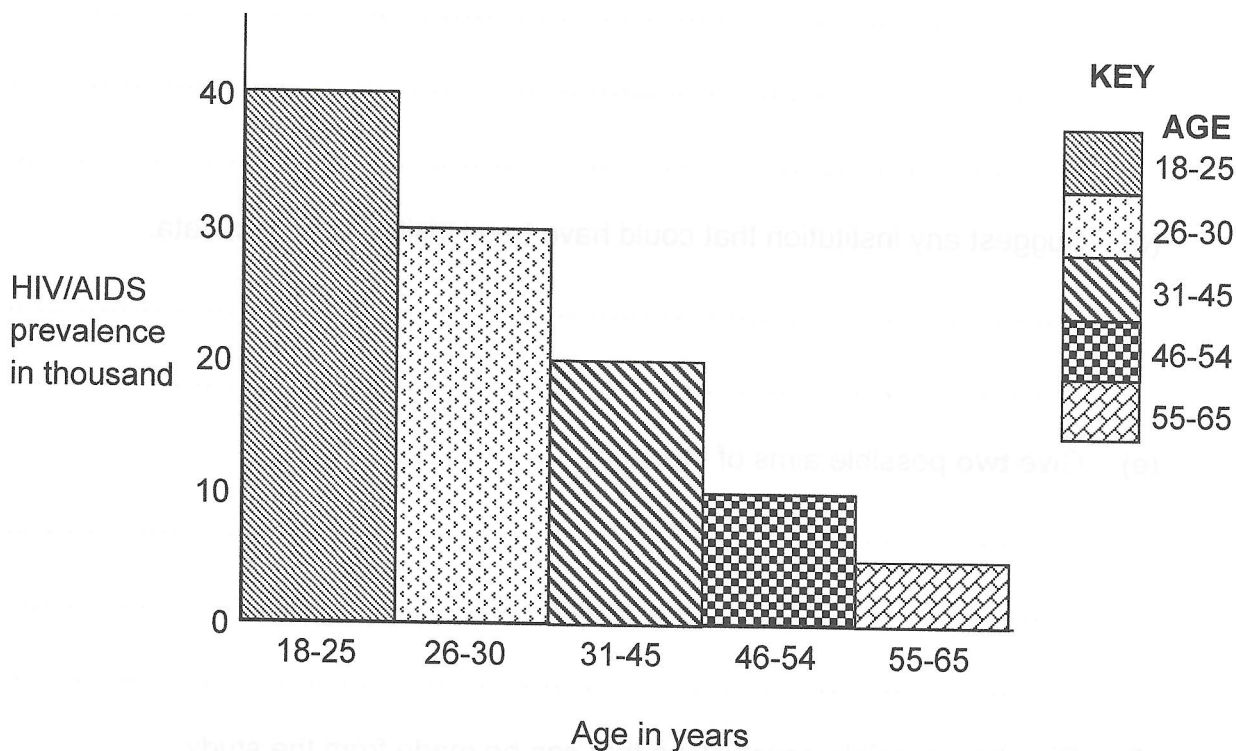
For
Examiner's
Use

Answer all questions in this section.

Use the information below to answer question 7.

In 2017 a survey was carried out by the Ministry of Health on the prevalence of HIV/ AIDS by age in country Y. The findings were presented as follows:

HIV/AIDS prevalence by Age in years in country Y



7. (a) Name the method of presenting findings used above.

..... (1)

(b) (i) Suggest any two methods of data collection that could have been used.

.....
.....
..... (2)

(ii) Give **two** advantages of any one of the data collection methods stated in 7 (b) (i).

.....
.....

(2)

(c) Identify any **two** factors that the researcher needs to consider when preparing for the study.

.....
.....

(2)

(d) Suggest any institution that could have been visited to collect data.

.....
.....

(1)

(e) Give **two** possible aims of the study.

.....
.....

(2)

(f) Give **two** possible conclusions that can be made from the study.

.....
.....

(2)

(g) Give **two** possible recommendations that can be made from the study to the government of country Y.

.....
.....

(2)



(h) Using the space below, present the findings in the form of a pie chart.

For
Examiner's
Use

(6)

[Total: 20]



A025

193

(d)

[Total: 20]

(ii) Using the space below, present the findings in the form of a pie chart.