



**BOTSWANA EXAMINATIONS COUNCIL
JUNIOR CERTIFICATE EXAMINATION**

SOCIAL STUDIES

15/2

Paper 2

October/November 2020

Marks: 80

Time: 2 Hours 15 Minutes

**Candidate
Full Names:**

--

Centre Number:

J	C				
----------	----------	--	--	--	--

Candidate Number:

--	--	--	--

INSTRUCTIONS

1. Write your full names and examination number in the spaces provided above.
2. Answer **ALL** questions in all sections.
3. All answers must be written in the spaces provided.
4. Candidates are allowed to use a calculator in this paper.

FOR EXAMINER'S USE ONLY

Question	Marks Scored
1	
2	
3	
4	
5	
6	
7	
Total Marks	

This question paper contains 12 printed pages.

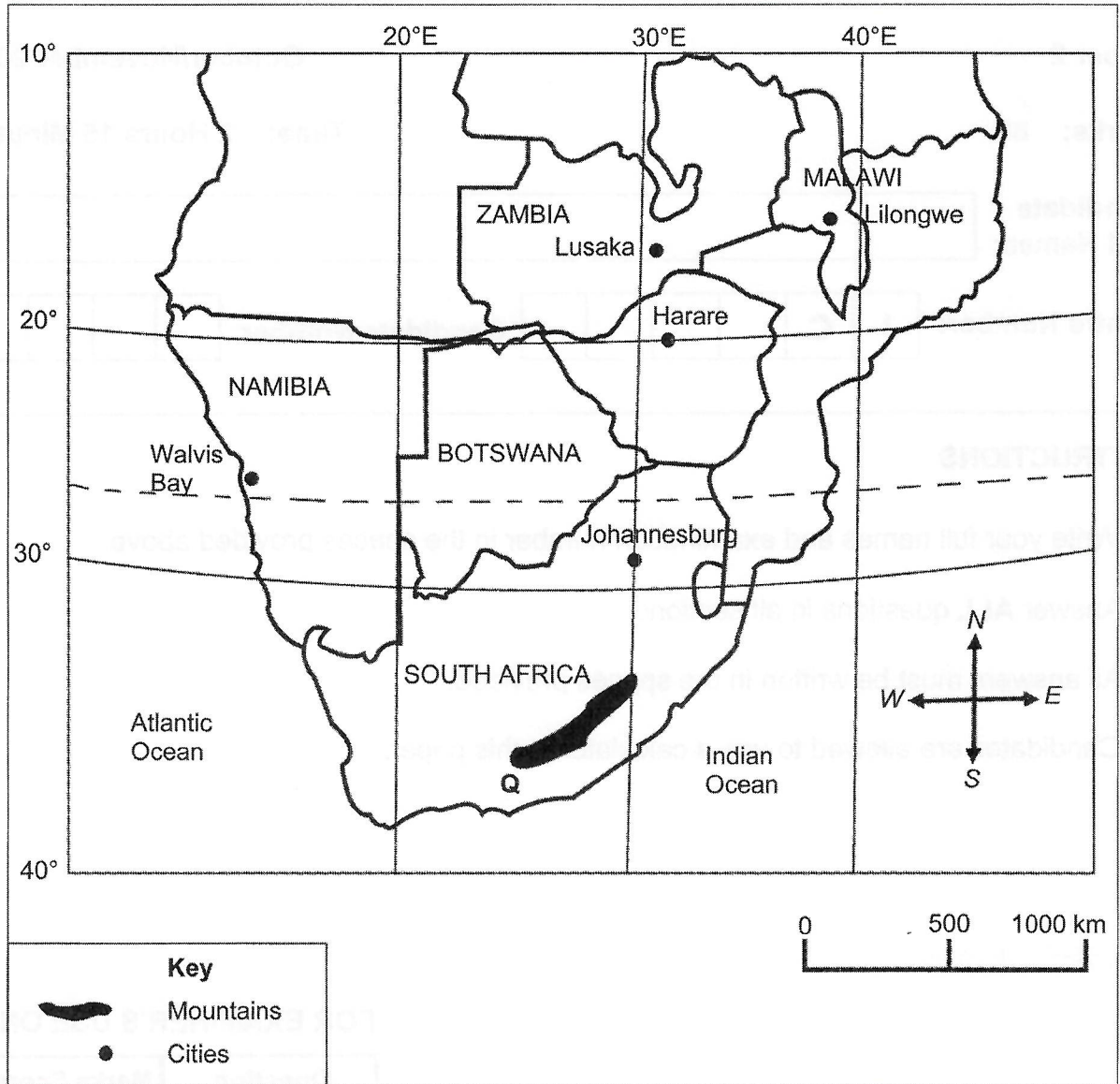
Section A

(30 Marks)

F
Exam
U

Answer all questions in this section.

Use the map of Southern Africa shown below to answer question 1.



1. (a) What is the straight line distance from Lusaka to Johannesburg in kilometres?
..... (1)
- (b) What is the direction of Lilongwe from Walvis Bay?
..... (1)
- (c) Locate Harare using latitudes and longitudes
- (i) Latitude
- (ii) Longitude (2)
- (d) State **two** factors that led to the rise of the Zulu kingdom in the area marked Q.
.....
.....
..... (2)
- (e) Explain **two** effects of the Mfecane wars in Southern Africa.
.....
.....
.....
.....
.....
.....
.....
..... (4)

[Total: 10]

The table below shows population growth rate, employment rate and rural to urban migration in Botswana from 1971 to 2011. Use it to answer question 2.

	Years				
	1971	1981	1991	2001	2011
Population growth rate (%)	4.0	4.6	5.2	4.4	3.8
Employment rate (%)	46	45	42	50	58
Rural to urban migration (%)	0	17	45	54	64

2. (a) State **three** problems that could result from the population growth rate between 1971 and 1981.

.....

.....

.....

.....

.....

..... (3)

- (b) Explain **two** factors that could have influenced population growth rate between 2001 and 2011.

.....

.....

.....

.....

.....

.....

.....

.....

..... (4)

870

0170



(c) Assess **one** strategy which could have been used to manage population growth rate between 1971 and 1991.

.....

.....

.....

.....

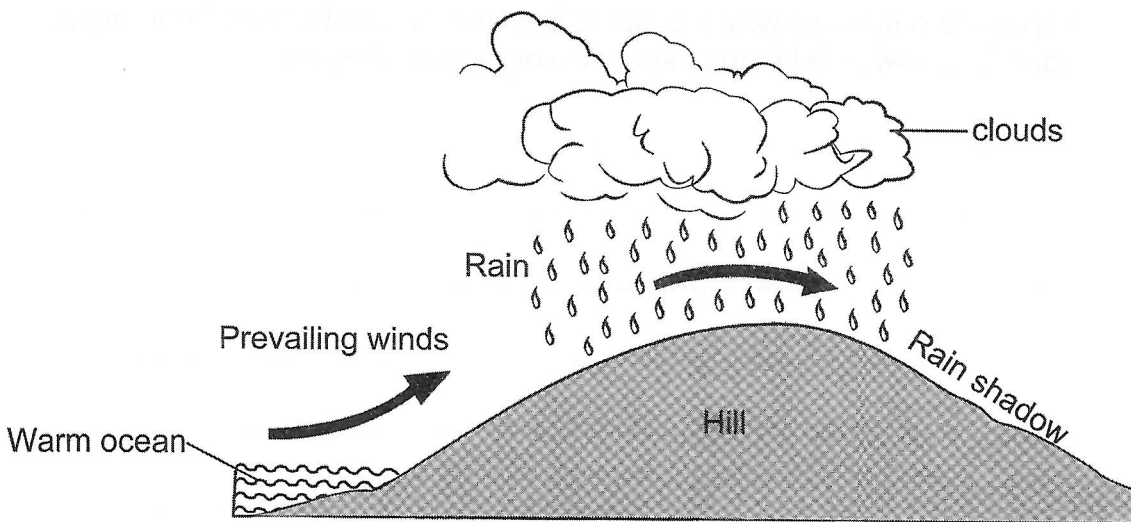
.....

.....

..... (3)

[Total: 10]

Use the diagram below illustrating one type of rainfall to answer questions 3 (a) and (b).



3. (a) (i) Name the type of rainfall shown.

..... (1)

(ii) State **two** other types of rainfall apart from the one shown.

.....

.....

..... (2)

(b) Describe the rain formation process of the type of rainfall shown in the diagram.

.....
.....
.....
.....
.....

(3)

The table below shows climatic conditions in country X.
Use it to answer question 3 (c).

	Jan	Feb	Mar	Apr	May	Jun	Jul	Aug	Sep	Oct	Nov	Dec
Average temp. (°C)	26	27	21	18	10	6	2	20	27	30	25	23
Average rainfall (mm)	190	170	100	18	8	0	0	0	0	8	90	150

(c) Explain **two** reasons why the period between November and February is good for growing field crops such as sorghum and beans.

.....
.....
.....
.....
.....
.....

(4)

[Total: 10]

Section B

(30 Marks)

*For
Examiner's
Use*

Answer **all** questions in this section.

4. (a) Explain any **two** activities which were carried out by the early European missionaries among Batswana.

.....
.....
.....
.....
.....
.....
.....
.....
.....

(4)

- (b) Evaluate **two** effects of HIV/AIDS on the economy of Botswana.

.....
.....
.....
.....
.....
.....
.....
.....
.....
.....
.....

(6)

[Total: 10]

6. (a) Explain **two** ways of promoting *kagisano* in the society.

.....
.....
.....
.....
.....
.....
..... (4)

(b) Evaluate **two** strategies used by the government of Botswana to protect the rights of consumers.

.....
.....
.....
.....
.....
.....
.....
.....
.....
.....
.....
.....
.....
.....
.....
.....
.....
..... (6)

[Total: 10]

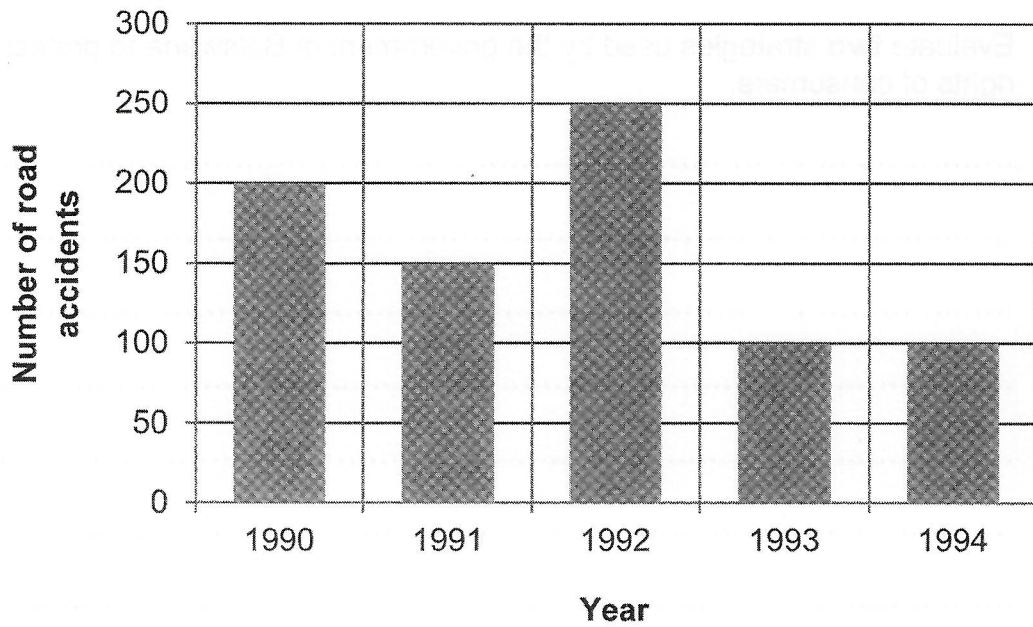
Section C

(20 Marks)

Answer **all** questions in this section.

Use the information and the figure below to answer question 7.

Kereng conducted a study on the number of road accidents that occurred between 1990 and 1994 in area V. Data was initially recorded in a table. The data from the table was then used to produce the figure shown below.



7. (a) Suggest a title for the study.
..... (1)
- (b) What method of data presentation is the figure above?
..... (1)
- (c) Give **three** possible aims of the study.
.....
.....
.....
.....
.....
.....
..... (3)

(d) List **three** findings based on the aims in (c).

.....
.....
.....
.....
.....
.....
..... (3)

(e) Suggest any **three** departments that Kereng might have visited to collect information for the study.

.....
.....
.....
.....
.....
.....
..... (3)

(f) Suggest any **three** problems that Kereng might have encountered during her study.

.....
.....
.....
.....
.....
.....
..... (3)

(g) Present Kereng's data in table form.

(6)

[Total: 20]

879

0170

