



**BOTSWANA EXAMINATIONS COUNCIL
JUNIOR CERTIFICATE EXAMINATION**

SOCIAL STUDIES

15/2

Paper 2

October/November 2018

Marks: 80

Time: 2 Hours 15 Minutes

Candidate Full Names:

Centre Number:

J	C				
---	---	--	--	--	--

Candidate Number:

--	--	--	--

INSTRUCTIONS

1. Write your full names and examination number in the spaces provided above.
2. Answer **ALL** questions in all sections.
3. All answers must be written in the spaces provided.
4. Candidates are allowed to use a calculator in this paper.

FOR EXAMINER'S USE ONLY

Question	Marks Scored
1	
2	
3	
4	
5	
6	
7	
Total Marks	

This question paper contains 12 printed pages.

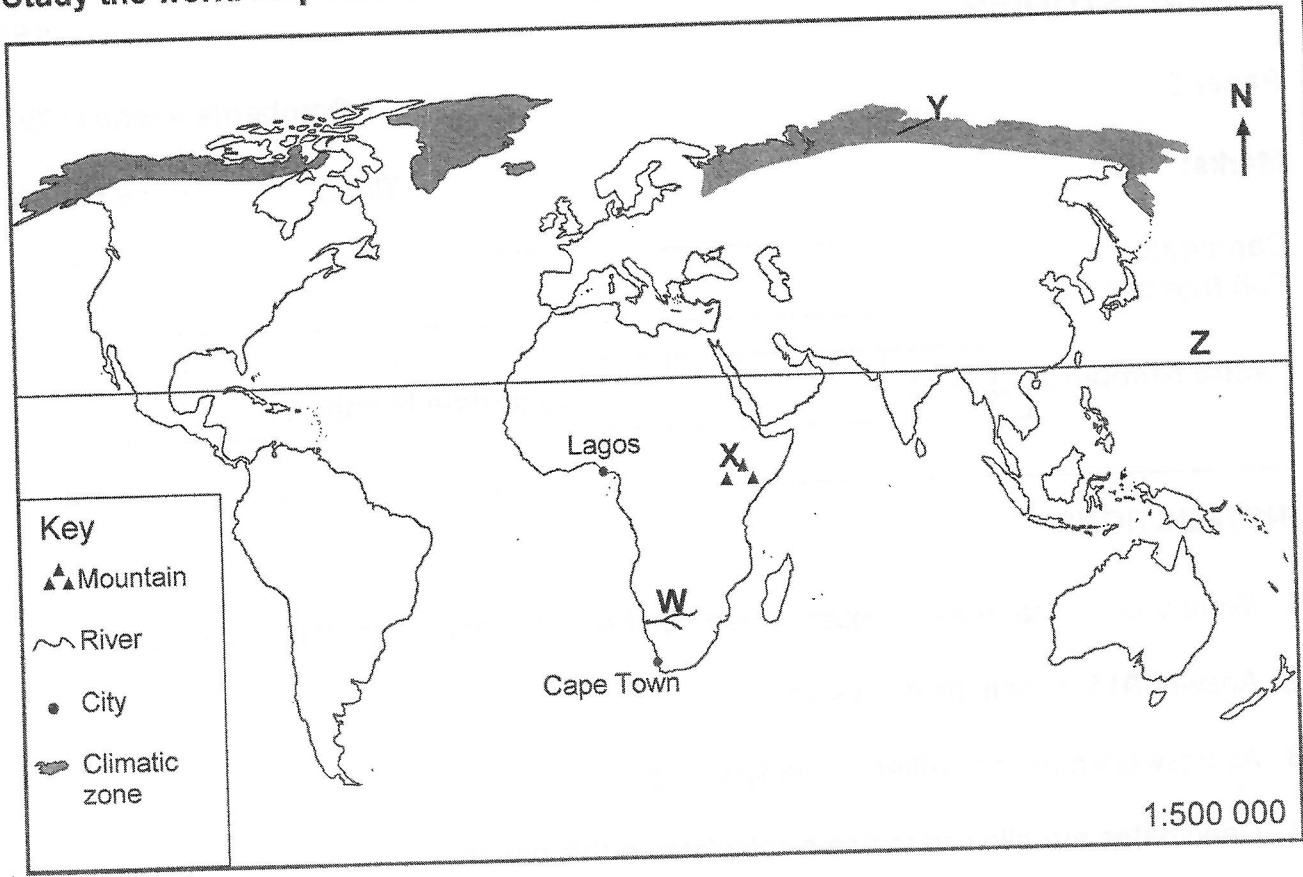
DO NOT TURN THE PAGE UNTIL YOU ARE TOLD TO DO SO

Section A

(30 Marks)

Answer all questions in this section.

Study the world map below to answer question 1.



1. (a) Identify the following on the map above:
- (i) River marked **W** (1)
 - (ii) Latitude line marked **Z** (1)
 - (iii) Direction of Cape Town from Lagos (1)
- (b) State **two** ways in which the feature marked **X** is important to the people living in that area.
-
-
-
- (2)



(c) State **two** other types of scale apart from the one shown on the map.

.....

..... (2)

(d) Describe any **three** climatic characteristics of the zone marked Y.

.....

.....


.....

.....

..... (3)

[Total: 10]

Use the picture below to answer question 2 (a) – (c).



Source: www.botswanaturism.co.bw

2. (a) Name a type of environmental region which can be associated with the picture above. (1)

(b) State any **two** economic activities that can be practised by the people living around this environment. (2)

(c) Suggest **three** ways in which the environment shown in the picture can be conserved. (3)



(d) Suggest and explain **two** ways in which good international relations of a country can affect the lives of its citizens.

.....

.....

.....

.....

.....

.....

(4)

[Total: 10]

3. Around the 1990s diamonds dominated Botswana's national economy.

(a) Give any **two** stages of diamond processing.

.....
..... (2)

(b) Discuss **two** effects of the decline of the value of diamonds on the economy of Botswana.

.....
.....
.....
.....
.....
.....
..... (4)

(c) State **two** minerals other than diamonds which contribute to the economy of Botswana.

.....
..... (2)

(d) State **two** ways in which mining affects the environment.

.....
.....
..... (2)

[Total: 10]



Section B

(30 Marks)

*For
Examiner's
Use*

Answer **all** questions in this section.

4. (a) Explain **two** ways by which national identity is important to a country.

.....
.....
.....
.....
.....
.....
.....
.....
.....
..... (4)

(b) Explain **three** ways through which Botswana's image can be protected.

.....
.....
.....
.....
.....
.....
.....
.....
.....
.....
..... (6)

[Total: 10]

5. (a) Describe **two** changes brought by the 1934 Native Tribunal Proclamations to the role of *Bogosi* institution.

.....
.....
.....
.....
.....
.....
.....
.....
.....
.....
.....
..... (4)

(b) Discuss **three** results of nationalism in the then Bechuanaland.

.....
.....
.....
.....
.....
.....
.....
.....
.....
.....
.....
.....
.....
.....
.....
.....
.....
..... (6)

[Total: 10]



6. (a) Outline **two** roles for each of the following stakeholders in the welfare of youth.

(i) Parents

.....
.....
.....
.....
.....
.....

(2)

(ii) NGOs

.....
.....
.....
.....
.....
.....

(2)

(b) Evaluate **two** efforts the government of Botswana is making to empower youth.

.....
.....
.....
.....
.....
.....
.....
.....
.....
.....
.....
.....

(6)

[Total: 10]

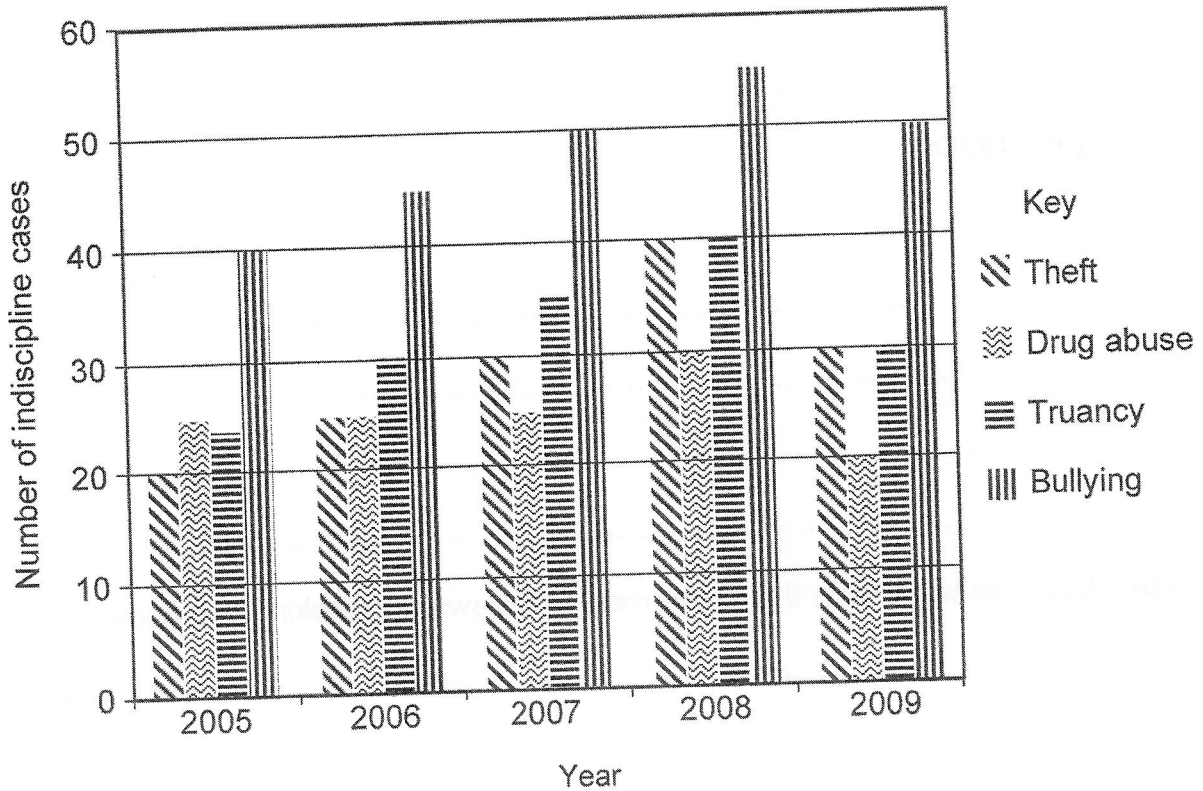
Section C

(20 Marks)

Answer all questions in this section.

Use the information provided to answer question 7.

A Senior Teacher Guidance & Counselling conducted a study at Rebatho CJSS in Marudi village, from 2005 to 2009. He presented the findings as follows.



7. (a) Where was the data for the study collected?
 (1)
- (b) State **two** research methods that the researcher may have used to collect data for the study.

 (2)
- (c) List **two** possible respondents in this study.

 (2)

(d) Suggest **three** possible objectives of the study.

.....
.....
.....
..... (3)

(e) (i) What was the trend of drug abuse cases between 2008 and 2009?

.....
..... (1)

(ii) Suggest **two** reasons that could explain the trend in (e)(i) above.

.....
.....
..... (2)

(f) State any **two** findings of the study.

.....
.....
..... (2)

(g) Suggest **two** recommendations that can be made to the school management based on the study.

.....
.....
..... (2)

- (h) Present the researcher's findings for the years 2005, 2007 and 2009 in a table form.

(5)

[Total: 20]

