



BOTSWANA EXAMINATIONS COUNCIL
JUNIOR CERTIFICATE EXAMINATION

SOCIAL STUDIES

15/2

Paper 2

October/November 2016

Marks: 80

Time: 2 Hours 15 Minutes

Candidate's Examination Number:

Centre						Candidate			

INSTRUCTIONS

1. Write your examination number in the space provided above.
2. Answer **ALL** questions in all sections.
3. All answers must be written in the spaces provided.
4. Candidates are allowed to use a calculator in this paper.

FOR EXAMINER'S USE ONLY

Question	Marks Scored
1	
2	
3	
4	
5	
6	
7	
Total Marks	



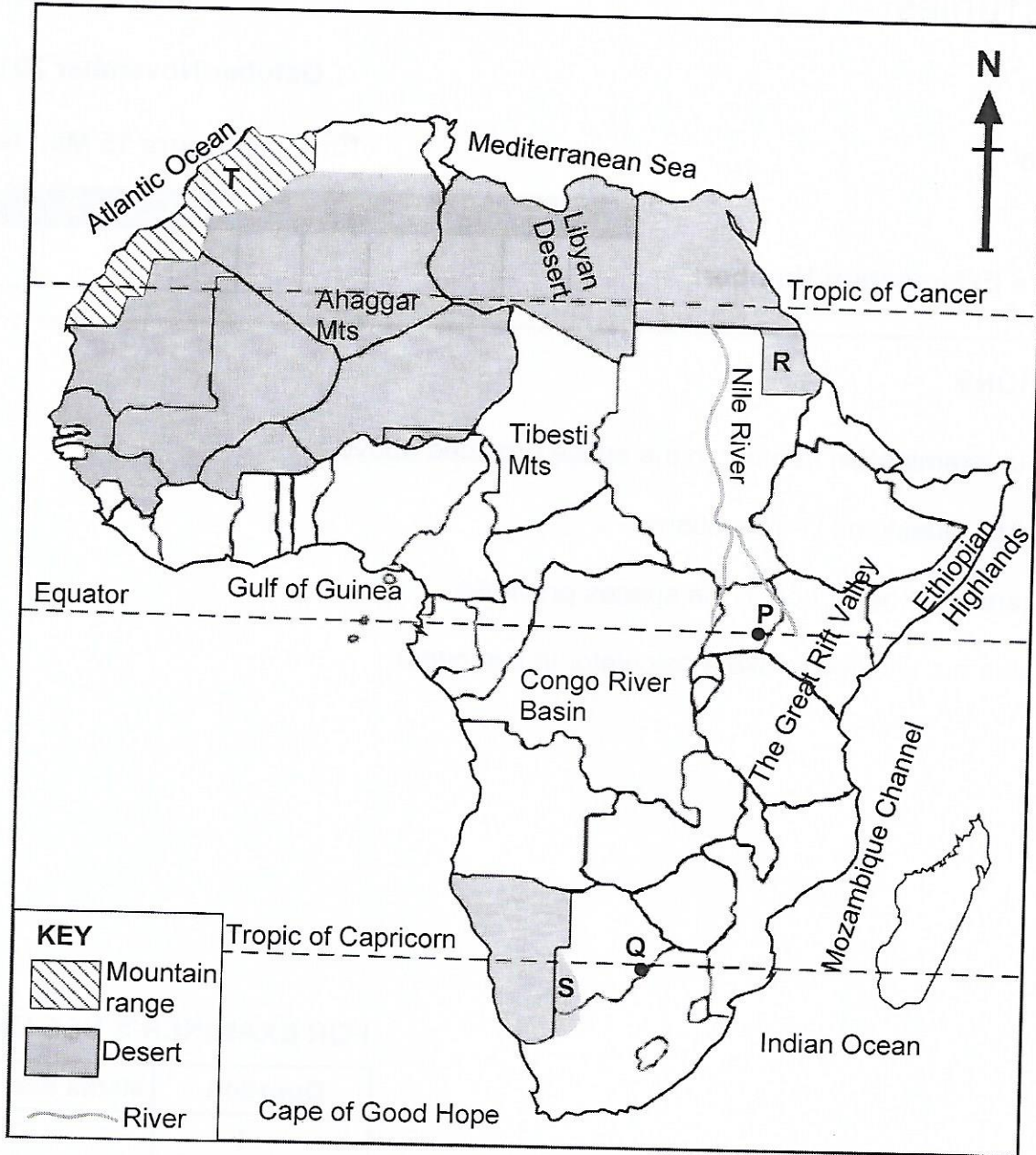
SECTION A

(30 Marks)


For
Examiners
Use

Answer all questions in this section.

Study the map of Africa below to answer question 1.



Scale



Source: Adapted from the World Atlas.

1. (a) Which desert is found in the area marked S?

..... (1)

(b) What is the straight line distance between points **P** and **Q** in kilometers?

..... (1)

(c) Explain the type of rainfall that is associated with features like the mountain range marked **T**.

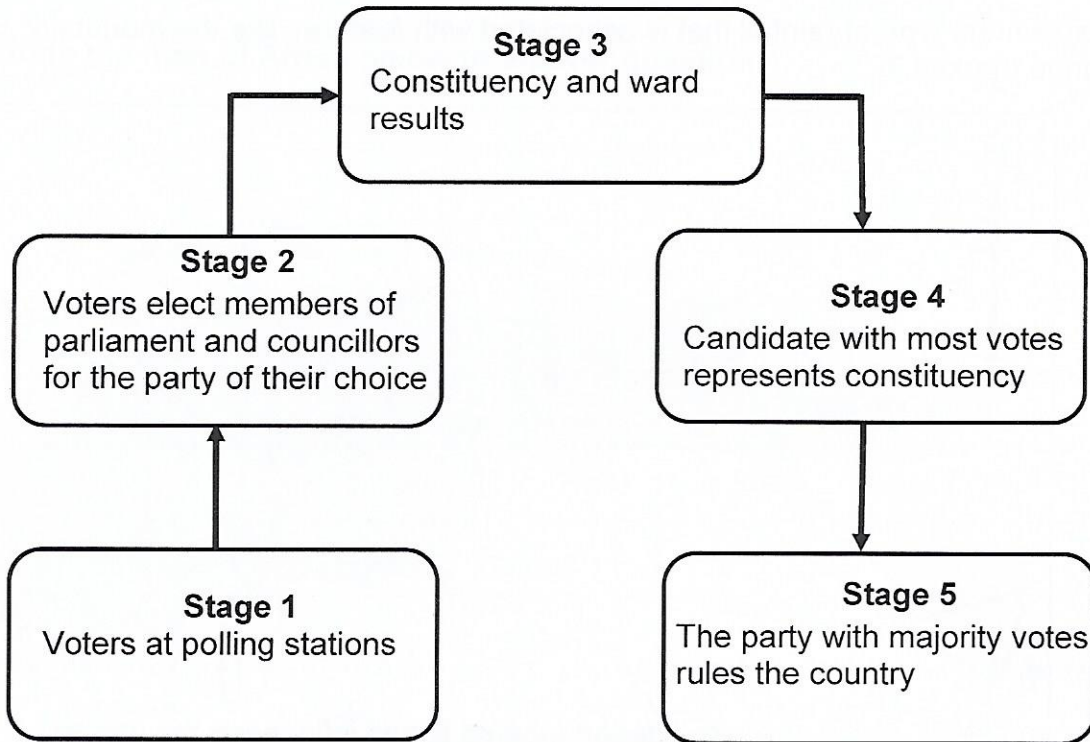
.....
.....
.....
.....
.....
.....
.....
.....
.....
.....
..... (4)

(d) Explain **two** ways in which the desert labeled **R** has influenced the way of life of people living there.

.....
.....
.....
.....
.....
.....
.....
.....
.....
.....
..... (4)

[10]

The flow chart below shows the election process for country X.
Use it to answer question 2.



Source: *Social Studies A Fresh Start*, V Ngongola and Gatsha, (2010).

2. (a) (i) Which form of governance is practiced in country X.

.....
..... (1)

(ii) State **three** reasons to support your answer in (a) (i) using information from the flow chart only.

.....
.....
.....
.....
.....
.....
.....
..... (3)

(b) State any other **two** forms of governance apart from the one illustrated by the flow chart.

.....

..... (2)

(c) Supposing your school held elections for prefects and you were the candidate with most votes like the candidate at stage 4.
Explain **two** responsibilities that you would have to the students.

.....

.....

.....

.....

.....

.....

.....

.....

.....

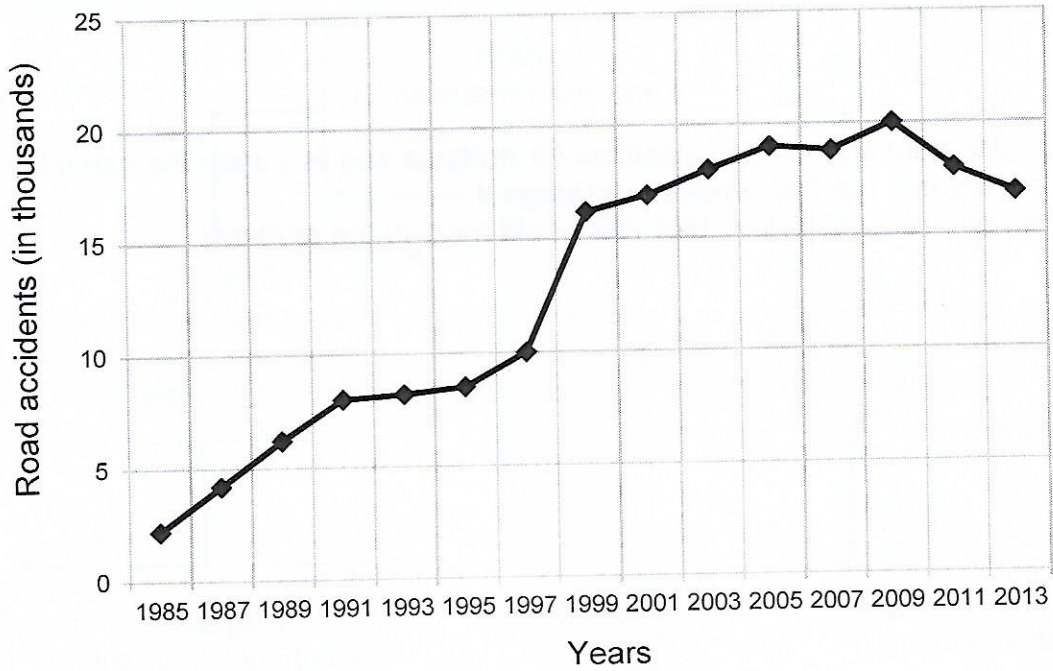
.....

.....

..... (4)

[10]

The graph below shows trends in road accidents in Botswana between 1985 and 2013. Use it to answer question 3.



Source: www.mvafund.Botswana.

3. (a) Describe the trend of road accidents from 2003 to 2013.

.....

.....

.....

.....

.....

.....

.....

.....

.....

.....

(2)

(b) Explain any **two** possible road safety measures that could have been used to change the trend of road accidents between 1995 and 2003.

.....
.....
.....
.....
.....
.....
.....
.....
.....
.....
.....

(4)

(c) Explain any **two** measures that might have been put in place that resulted in the reduction of road accidents between 2009 and 2013.

.....
.....
.....
.....
.....
.....
.....
.....
.....
.....
.....

(4)

[10]

.....
.....
.....
.....

(6)

[10]

5. (a) Explain any **two** factors that have influenced population distribution in Botswana.

.....
.....
.....
.....
.....
.....
.....
.....
.....
.....
.....
.....

(4)

(b) Discuss **two** effects of rapid population growth on the environment.

.....
.....
.....
.....
.....
.....
.....
.....
.....
.....

.....
.....
.....
.....
.....
.....
.....
..... (6)

[10]

6. (a) Explain any **two** reasons for conserving the environment.

.....
.....
.....
.....
.....
.....
.....
.....
.....
.....
..... (4)

SECTION C

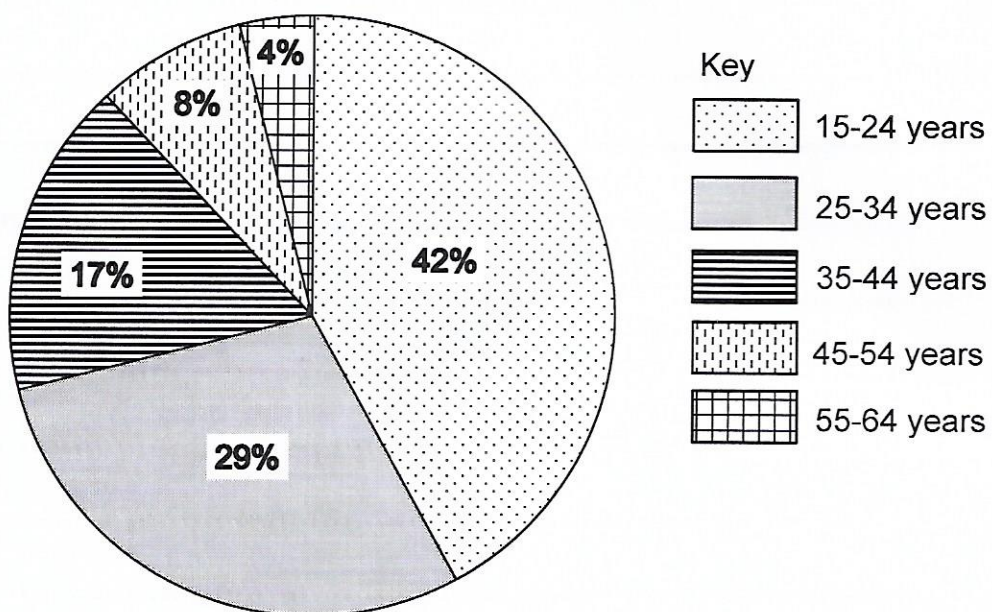
Answer **all** questions in this section.

(20 marks)

Use the information below to answer question 7.

In 2011 a labour force survey was carried out on the status of unemployment in urban areas in Botswana by age. The findings are presented as follows:

Unemployment Rate (%) by Age



Source: National Institute of Science Education and Research (NISER), 2013.

7. (a) Which method of data presentation is used?

..... (1)

(b) Suggest any **two** methods of data collection that could have been used.

.....
.....
.....
..... (2)

(c) Give **two** advantages of any of the data collection methods stated in (b).

.....
.....
.....
.....
.....
..... (2)

(d) Identify **one** possible way in which preparations for the study could have been made.

.....
..... (1)

(e) Suggest **two** departments that could have been visited to collect data.

.....
.....
.....
..... (2)

(f) Give **two** possible aims of the study.

.....
.....
.....
.....
..... (2)


(g) What advice can you give to the unemployed age group of 25-34 years?

.....
.....
.....
..... (2)

(h) Give **two** possible conclusions that can be made from the study.

.....
.....
.....
.....
..... (2)

(i) Using the space below, present the findings in the form of a histogram.



(6)

[20]