



**BOTSWANA EXAMINATIONS COUNCIL
JUNIOR CERTIFICATE EXAMINATION**

SOCIAL STUDIES

15/2

Paper 2

October/November 2015

Marks: 80

Time: 2 Hours 15 Minutes

Candidate's Examination Number:

Centre						Candidate			

INSTRUCTIONS

1. Write your examination number in the space provided above.
2. Answer **ALL** questions in all sections.
3. All answers must be written in the spaces provided.
4. Candidates are allowed to use a calculator in this paper.

FOR EXAMINER'S USE ONLY

Question	Marks Scored
1	
2	
3	
4	
5	
6	
7	
Total Marks	

This question paper contains 14 printed pages.

DO NOT TURN THE PAGE UNTIL YOU ARE TOLD TO DO SO.

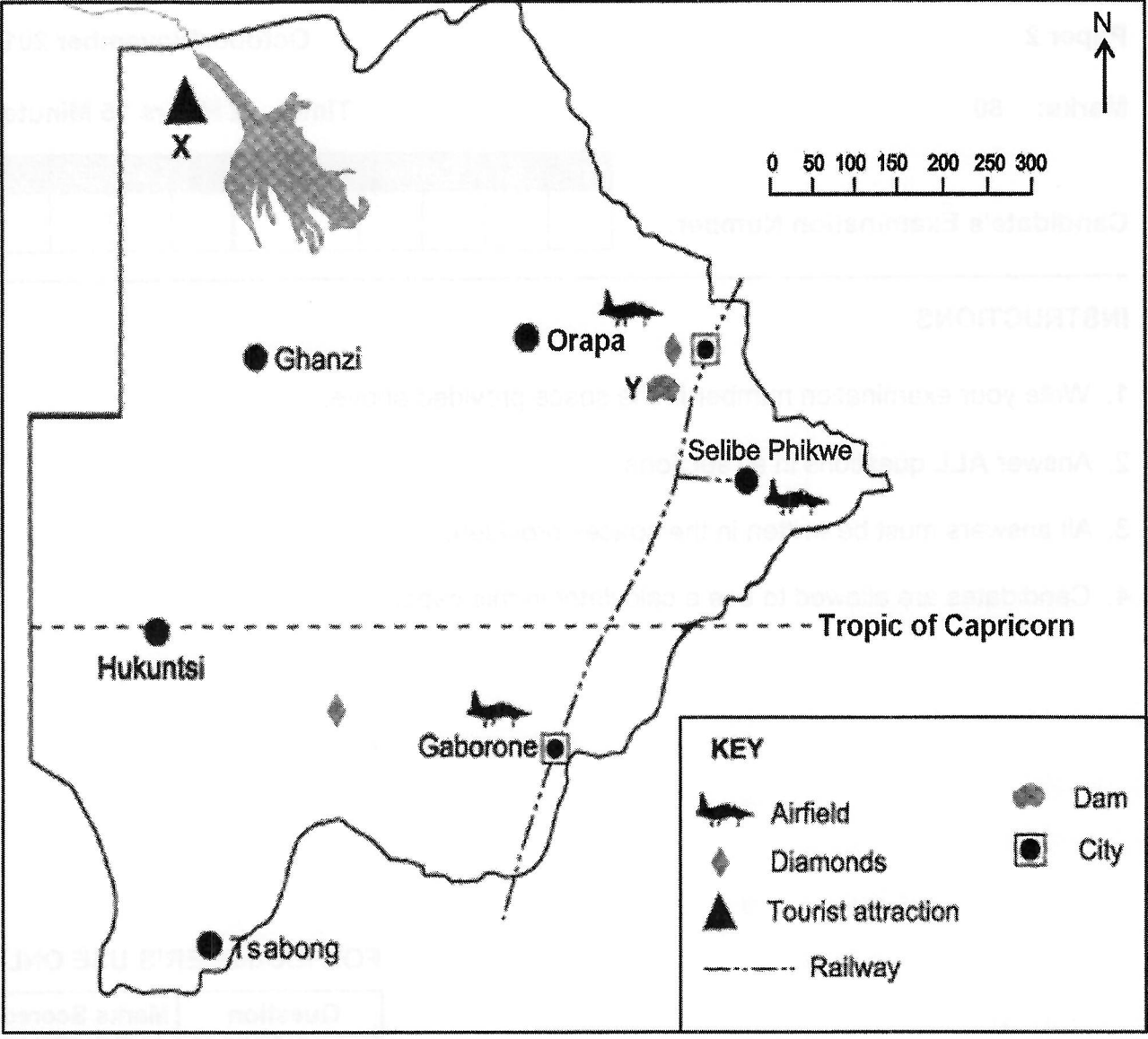


SECTION A

(30 Marks)

Answer **all** questions in this section.

Study the map of Botswana below to answer question 1.



1. (a) Identify the following:
- (i) Tourist attraction marked X (1)
 - (ii) Dam marked Y (1)
 - (iii) The direction of Hukuntsi from Orapa.
..... (1)

(b) Give the straight line distance in kilometers between Tsabong and Ghanzi.

..... (1)

(c) State **two** factors that are evident in the map which could make people prefer to live in the eastern part of the country.

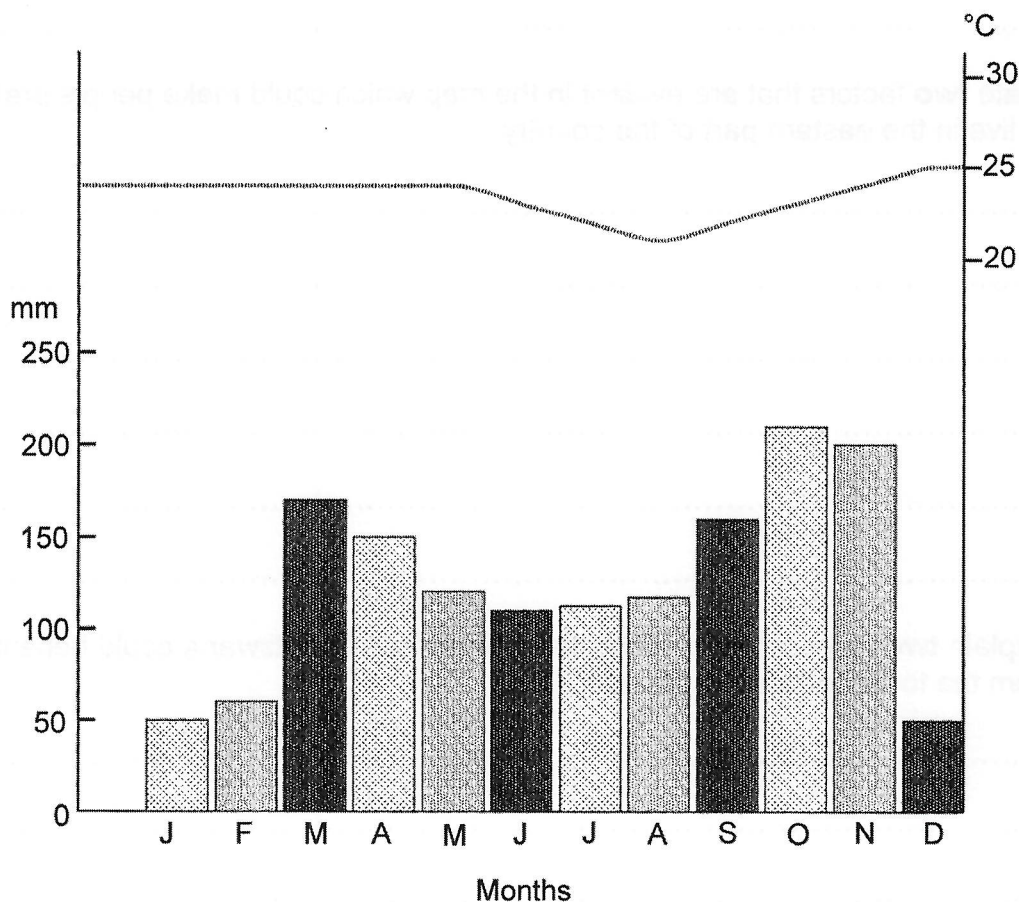
.....
.....
.....
.....
.....
.....
..... (2)

(d) Explain **two** ways through which the government of Botswana could benefit from the tourist attraction marked X.

.....
.....
.....
.....
.....
.....
.....
.....
.....
.....
.....
.....
.....
.....
.....
.....
.....
.....
.....
.....
..... (4)

[10]

Use the climate graph provided to answer question 2.



Source: *Social Studies is Fun* by V. Ngongola, K. Selwe, (2007).

2. (a) Which climatic zone is reflected by the graph?

..... (1)

(b) State **two** elements of weather that are evident in the graph.

(i)

(ii) (2)

(c) What conclusion can be made about the weather elements for the month of October?

.....

.....

..... (1)

Use the information below to answer questions 3 (a) and (b).

Mr Nossop, a Motswana man, has been a successful farmer for more than ten (10) years. He has been ploughing over ten (10) hectares and getting over 200 bags of sorghum. Of late Mr Nossop's production has declined, despite the modern methods of farming he employed.

3. (a) State any **two** problems that might have contributed to the decline in production.

.....
.....
.....
.....
..... (2)

- (b) Given Mr. Nossop's challenges, suggest **two** ways in which the government could assist him.

.....
.....
.....
.....
.....
.....
.....
..... (4)

.....
.....
.....
.....
.....

(6)

[10]

5. (a) Explain any **two** ways in which women have been disadvantageded by culture.

.....
.....
.....
.....
.....
.....
.....
.....
.....
.....
.....
.....

(4)

(b) Evaluate any **two** ways in which HIV and AIDS could be a challenge to the family.

.....
.....
.....
.....
.....
.....

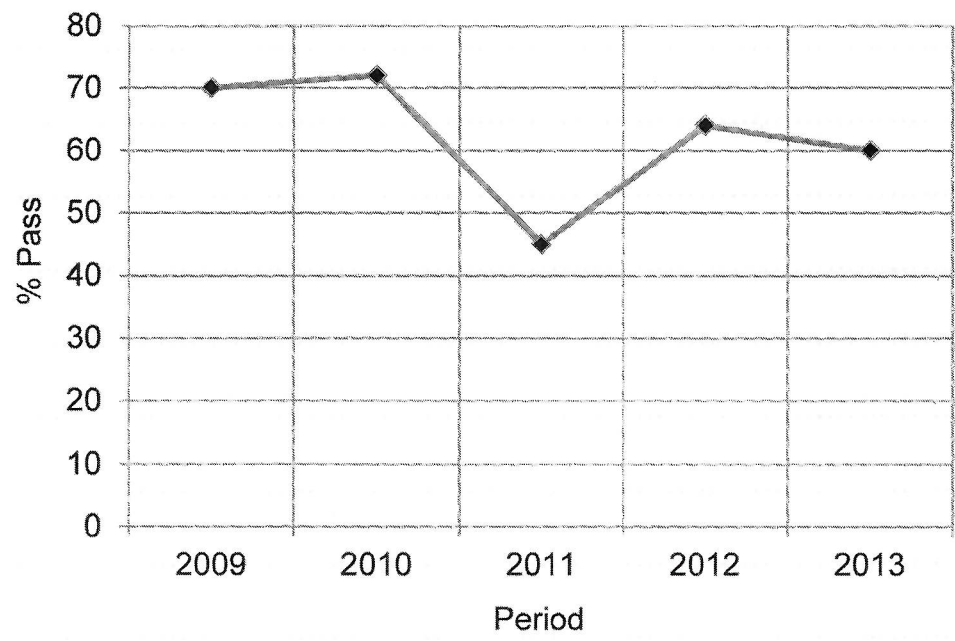
SECTION C

Answer all questions in this section.

(20 marks)

7. Use the information below to answer question 7.

Nadia conducted a study on academic performance of students from Sebokolodi CJSS in Marung village. Some of the findings are presented in the graph below.



(a) Where was the study conducted?

..... (1)

(b) Suggest any **two** methods of data collection which the researcher could have used.

.....
.....
.....
..... (2)

(c) Suggest any **three** possible aims of the study.

.....
.....
.....
.....
.....
.....
..... (3)

(d) Suggest **one** problem that could have been encountered by the researcher.

.....
.....
..... (1)

(e) State any **two** findings from the research.

.....
.....
.....
..... (2)

(f) Make **two** recommendations addressing the findings mentioned at 7 (e) above.

.....
.....
.....
.....
..... (2)

(g) Supposing you were the one who carried out the research, what would you have done under the following:


(i) Acknowledgement;

.....
..... (1)

(ii) Bibliography?

.....
..... (1)

(h) Using the space below draw a histogram to represent Nadia's findings relating to the years 2010 to 2013.



(7)
[20]