



BOTSWANA EXAMINATIONS COUNCIL  
JUNIOR CERTIFICATE EXAMINATION

**SOCIAL STUDIES**

**15/2**

Paper 2

October/November 2012

Marks: 80

Time: 2 Hours 15 Minutes

Candidate's Examination Number:

Centre					Candidate				

**INSTRUCTIONS**

1. Write your examination number in the space provided above.
2. Answer **ALL** questions in all sections.
3. All answers must be written in the spaces provided.
4. Calculators may be used in this paper.

**FOR EXAMINER'S USE ONLY**

Question	Marks Scored
1	
2	
3	
4	
5	
6	
7	
Total Marks	

*This question paper contains 13 printed pages.*

**DO NOT TURN THE PAGE UNTIL YOU ARE TOLD TO DO SO.**

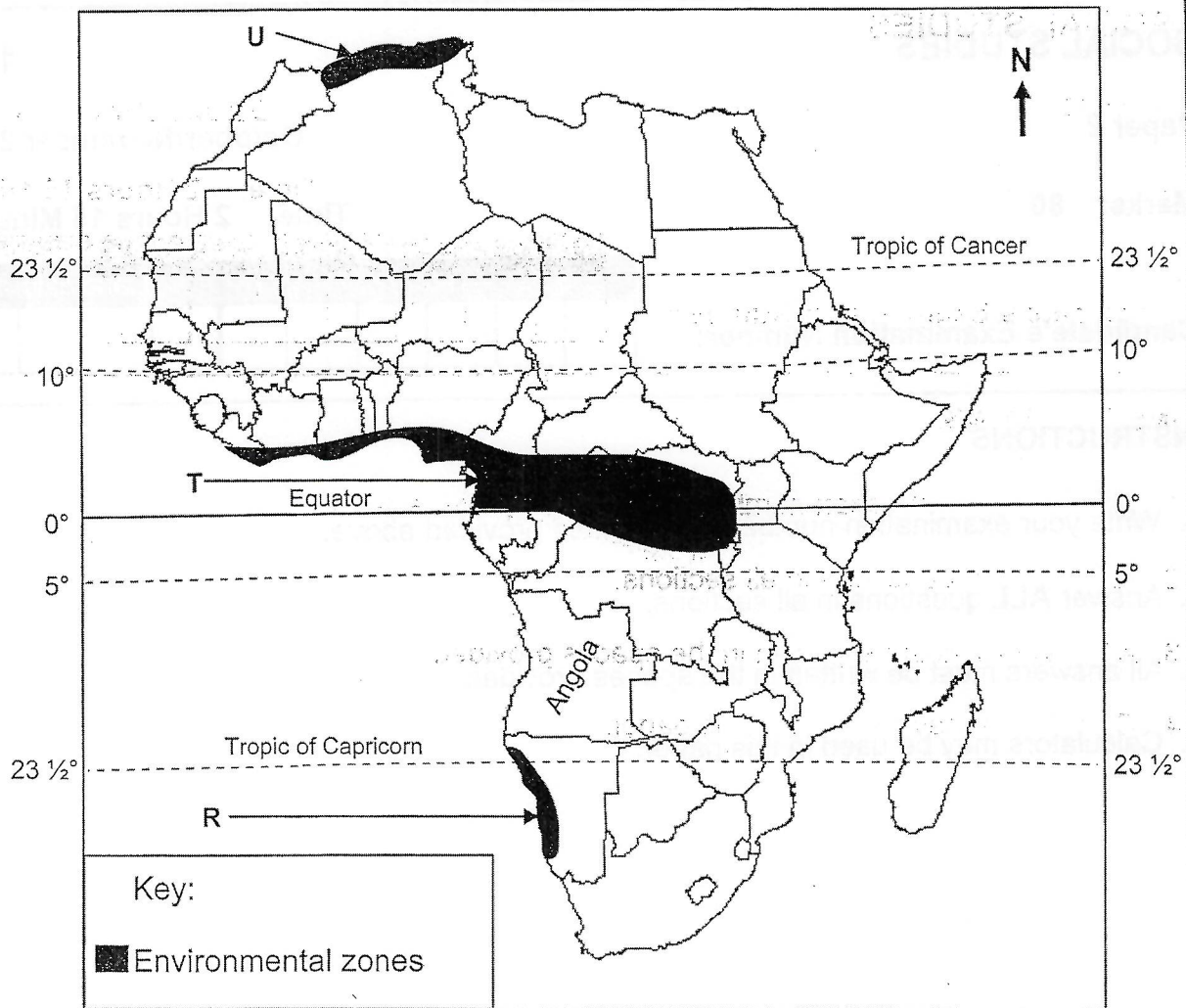


**SECTION A**

**(30 Marks)**

Answer **all** questions in this section.

Use the map of Africa below to answer question 1.



1. (a) Identify the following environmental zones:

(i) Zone marked **U** ..... (1)

(ii) Zone marked **T** ..... (1)

(b) Locate Angola using lines of latitude.

..... (1)

(c) Why is wine-making an important activity in the environmental zone marked **U**?

..... (1)

(d) Describe any **three** characteristics of the vegetation found in the environmental zone marked **T**.

.....

.....

.....

.....

.....

.....

.....

.....

(3)

(e) Describe any **three** characteristics of the climate found in the environmental zone marked **R**.

.....

.....

.....

.....

.....

.....

.....

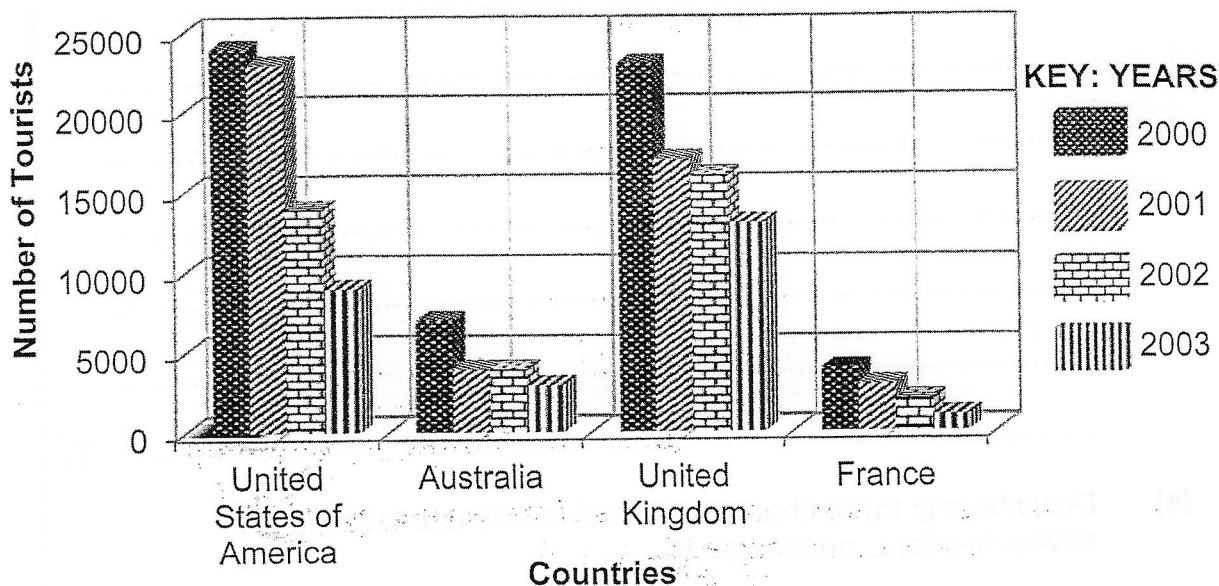
.....

(3)

[10]

Use the graph below to answer question 2.

Botswana Tourists Arrivals (2000-2003)



Source: Adapted from *Botswana Institute for Development Policy Analysis and the World Bank (in Botswana Institute for Development Policy Analysis Report, 2006)*.

2. (a) Describe the trend of tourists arrivals between the years 2000 and 2003. .... (1)
- (b) Suggest **two** reasons that might have led to the trend reflected in tourists' visits to Botswana over the years shown. .... (2)
- (c) Suggest **three** ways through which Botswana could have benefited from tourists coming from the United Kingdom and the United States of America in the year 2000. .... (3)

(d) Explain **two** possible ways through which Botswana can attract more tourists into the country.

.....

.....

.....

.....

.....

.....

.....

.....

.....

(4)

[10]

Use the information below to answer questions 3 (a) and (b).

The country of Kenya is a mix of cultures and tribal groupings that have a set of unique traditions. Many of Kenya's interactions with culture take place in the western part of the country mainly among the Luos and Luhya communities.

Ramogi hills are a popular attraction in the region. The Luo community believe that the father of the Luo tribe (Ramogi) settled on the hills after a long, hard and tiresome journey from Uganda. This region is now a forest and a big rock that lies here is believed to have been a bull that turned into a rock. These hills which are located near Kisumu city give visitors a good view of the Western Rift that includes Lake Kanyaboli and the Yala swamp.

Source:<http://africapoint.hubpages.com>

3. (a) Explain **three** ways through which the Ramogi cultural site can benefit the Luo community.

.....

.....

.....

.....

.....

.....

.....

.....

.....

.....

.....

..... (6)

- (b) Suggest **two** practices that could be used by the Luo community to protect the environment.

.....

.....

.....

.....

..... (2)

(c) Give two examples of Botswana's cultural heritage.

.....

..... (2)

[10]

**SECTION B (30 Marks)**

Answer all questions in this section.

4. (a) Explain **two** ways in which the physical characteristics of the Australopithecus enabled them to survive in their environment.

.....  
.....  
.....  
.....  
.....  
..... (4)

- (b) Discuss **two** differences between the technological developments of the Stone Age and Iron Age periods.

.....  
.....  
.....  
.....  
.....  
.....  
.....  
.....  
..... (6)

[10]

5. (a) Explain any **two** factors that encouraged the growth of towns and cities in Botswana.

.....  
.....  
.....  
.....  
.....  
..... (4)

(b) Outline any **three** economic opportunities available in rural areas.

.....  
.....  
.....  
.....  
.....  
.....  
.....  
.....  
.....  
..... (6)

[10]

6. (a) Describe **two** of the major features of the Early Egyptian form of government.

.....  
.....  
.....  
.....  
.....  
.....  
.....  
.....

(4)

(b) Explain **three** ways in which Democracy differs from Monarchy.

.....  
.....  
.....  
.....  
.....  
.....  
.....  
.....  
.....  
.....  
.....  
.....  
.....  
.....  
.....  
.....  
.....  
.....  
.....  
.....

(6)

[10]

SECTION C

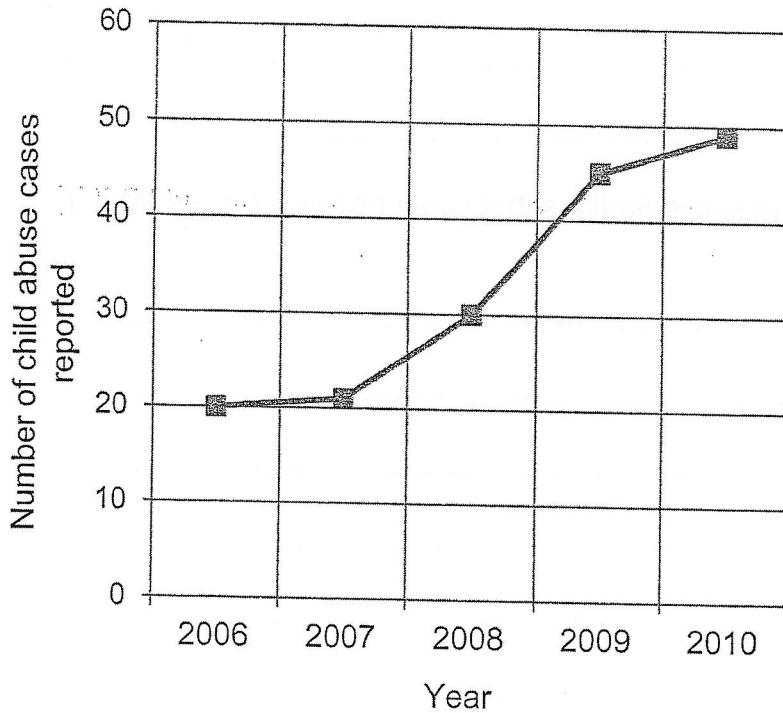
(20 Marks)

For  
Examiner's  
Use

Answer all questions in this section.

Use the information below to answer question 7.

A social worker conducted a study on child abuse in urban areas, in Botswana from 2006 to 2010. She presented her findings as follows:



Adapted from *Social Studies, A fresh start* by V. Ngongola and P Montsho.

7. (a) Which method of data presentation did the social worker use?  
..... (1)
- (b) Where was the study conducted?  
..... (1)
- (c) State **one** possible data collection method that may have been used to collect the data for this study.  
.....  
..... (1)

(d) Suggest **three** possible aims of the study.

.....  
.....  
.....  
.....  
.....  
..... (3)

(e) Suggest **three** possible findings that could have originated from the research.

.....  
.....  
.....  
.....  
.....  
..... (3)

(f) Suggest any **three** causes of child abuse that the social worker may have come across in her research.

.....  
.....  
.....  
.....  
.....  
..... (3)

(g) State any **two** recommendations that can be made to the Botswana government on the basis of this research.

.....

.....

.....

.....

.....

.....

.....

(2)

(h) Present the social worker's findings in a table form.  
Use the space provided below.

(6)

[20]

(g)

State any two recommendations if it can be made for the Board of government on the basis of the research.

(h)

Present the school work's findings in a table form. Use the space provided below.

(20)

\_\_\_\_\_

\_\_\_\_\_